
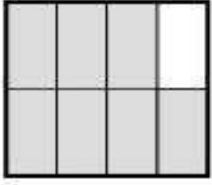


☞ Aşağıdaki şekiller eş parçalara bölünmüştür. Boyalı bölgeleri ifade eden kesirleri yan tarafa yazınız.



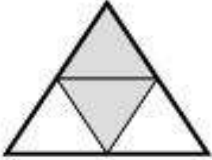
=



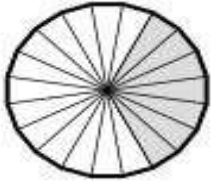
=



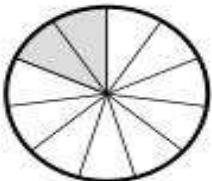
=




=



=



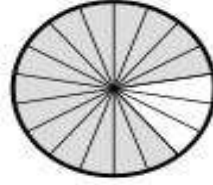
=



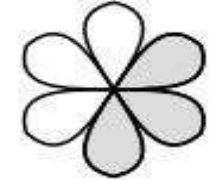
=




=



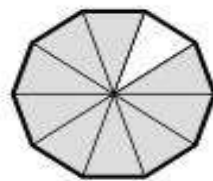
=



=

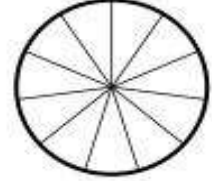


=




=

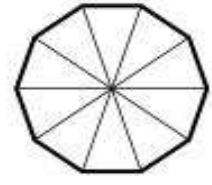
☞ Aşağıdaki şekilleri yanlarında yazan kesir sayısı kadar boyayınız.



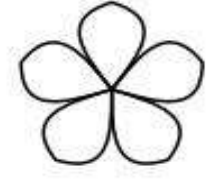
= $\frac{6}{11}$



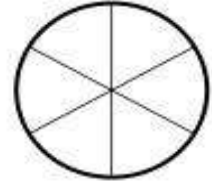
= $\frac{11}{13}$



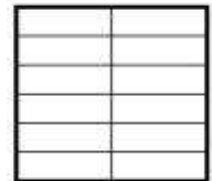
= $\frac{9}{10}$



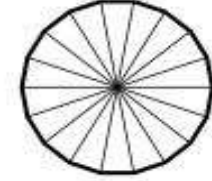
= $\frac{3}{5}$



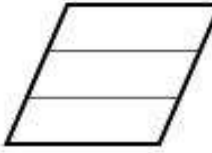
= $\frac{4}{6}$



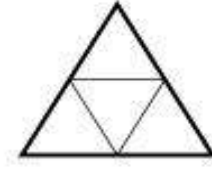
= $\frac{6}{12}$



= $\frac{5}{18}$




= $\frac{2}{3}$



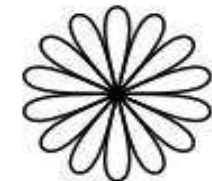
= $\frac{3}{4}$



= $\frac{6}{20}$



= $\frac{5}{19}$



= $\frac{3}{14}$